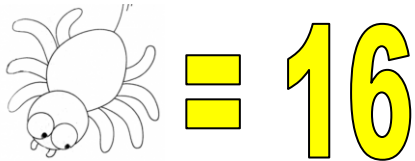
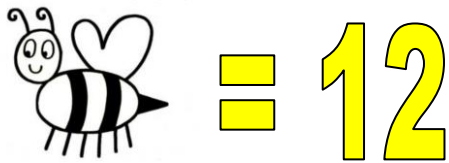


## SCHEDA OPERATIVA

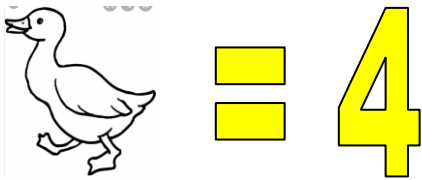
GIOCHI DI LOGICA



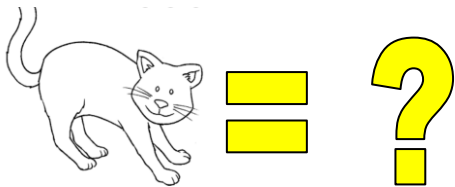
SE UN RAGNO VALE 16



UN'APE VALE 12



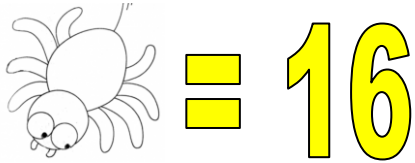
E UNA PAPERA VALE 4



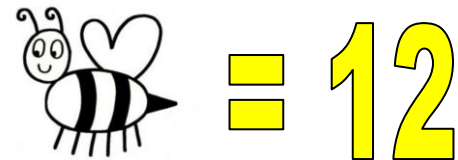
QUANTO VALE UN GATTO?



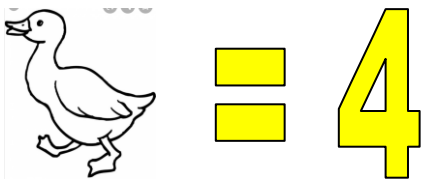
## SCHEDA OPERATIVA – soluzione GIOCHI DI LOGICA



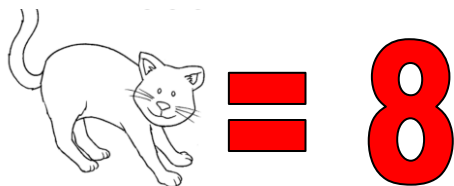
un ragno vale 16 (8x2),



un'ape vale 12 (6x2),



una papera vale 4 (2x2),



Un gatto vale 8 (4x2 perché vale **2 A ZAMPA**)

## SCHEDA OPERATIVA

GIOCHI DI LOGICA

**4**

**UOMINI**



**4**

**ORE**



**4**

**PAIA**



**8**

**UOMINI**



**8**

**ORE**



**?**

**PAIA**



# In punta di tacco Scarperentola a spasso nel tempo

SCHEDA OPERATIVA - soluzione

GIOCHI DI LOGICA

**4**

**UOMINI**



**4**

**ORE**



**4**

**PAIA**



**8**

**UOMINI**



**8**

**ORE**



**16**

**PAIA**



**RADDOPPIA IL NUMERO DEGLI UOMINI MA RADDOPPIA ANCHE IL TEMPO**

**4 UOMINI IN 8 ORE = 8 PAIA**

**8 UOMINI IN 8 ORE = 16 PAIA**